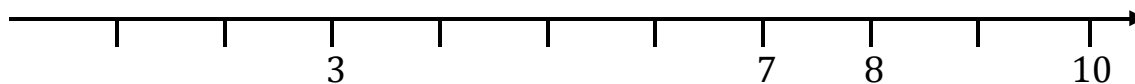
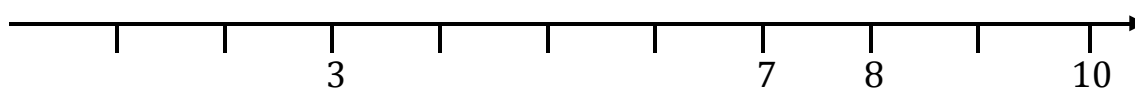


## DOVE STA ... SULLA LINEA DEI NUMERI ?

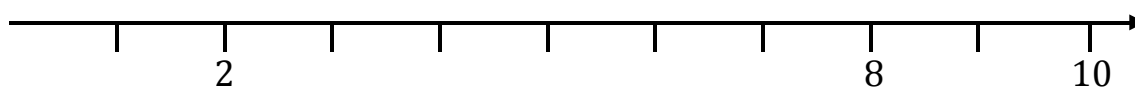
Dov'è il numero **4** ?



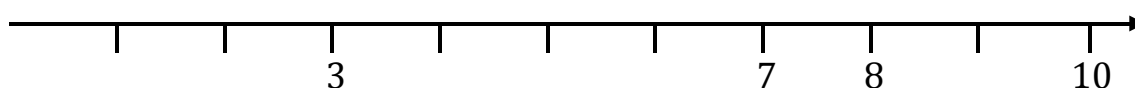
Dov'è il numero **6** ?



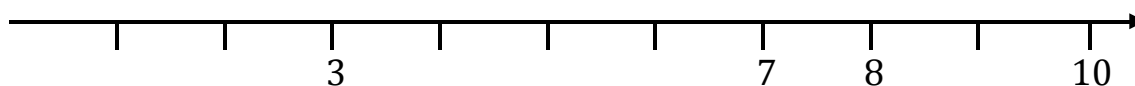
Dov'è il numero **5** ?



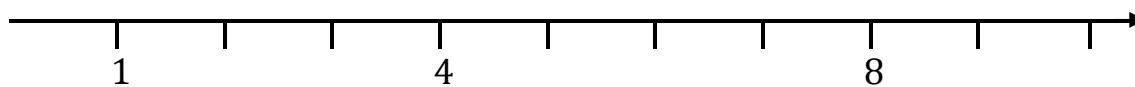
Dov'è il numero **9** ?



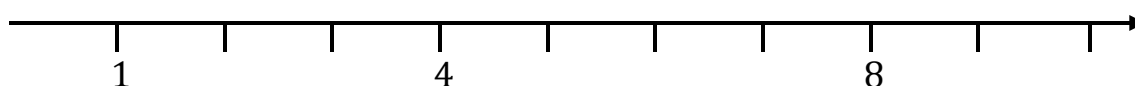
Dov'è il numero **1** ?



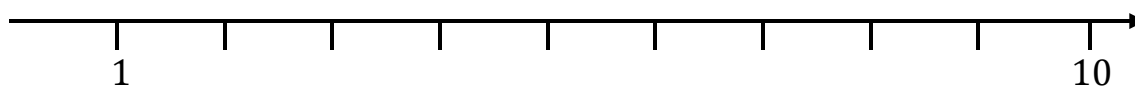
**Dov'è il numero 6 ?**



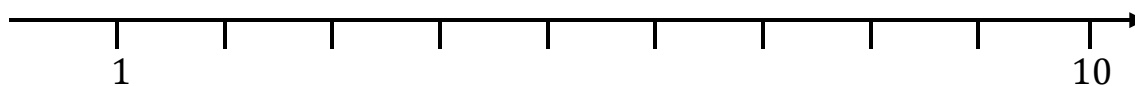
**Dov'è il numero 7 ?**



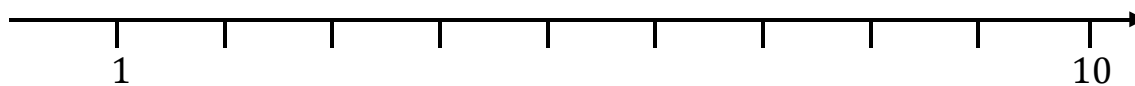
**Dov'è il numero 5 ?**



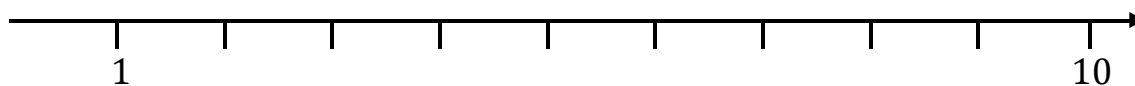
**Dov'è il numero 8 ?**



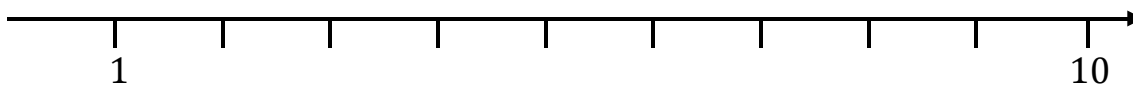
**Dov'è il numero 2?**



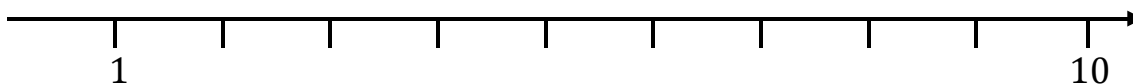
**Dov'è il numero 7 ?**



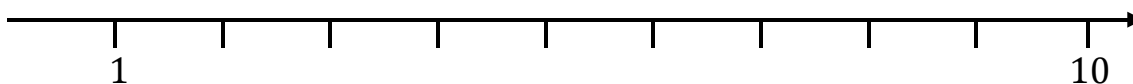
**Dov'è il numero 4 ?**



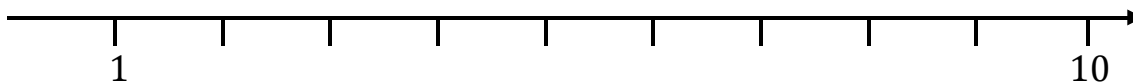
**Dov'è il numero 3 ?**



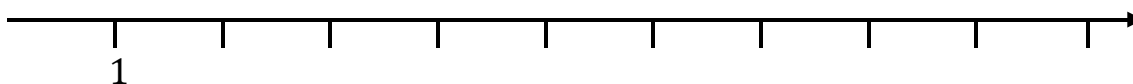
**Dov'è il numero 9 ?**



**Dov'è il numero 5 ?**



**Dov'è il numero 8 ?**



**Dov'è il numero 7 ?**

